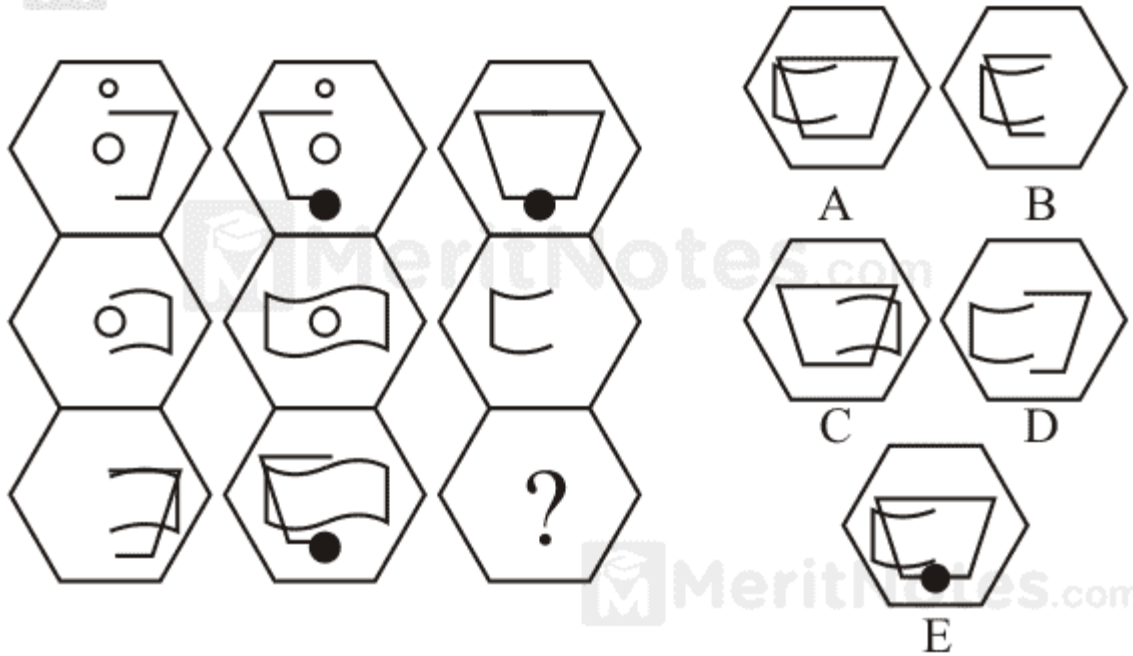


Logic Puzzles Questions with Answers Pdf

Questions : 1

Which hexagon should replace the question mark?



Ans: E

1 is added to 2 to make 3

4 is added to 5 to make 6

But similar symbols disappear.

Questions : 2

Comparison



is to



Ans: D

The large arc moves 180° , the next largest moves 90° anticlockwise and the smallest arc moves 90° clockwise.

Questions : 3

Comparison



is to :

as



is to :

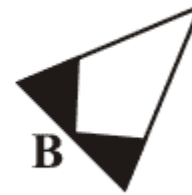



Ans: D

Black circles turn to white diamonds; white circles turn to black diamonds, and vice versa.

Questions : 4

Which is the missing segment?





Ans: D

Looking round the octagon there are three pairs which have black/white reversal.

Questions : 5

Which circle below should replace the question mark?



Ans: B

Ignore black symbols as they are not carried forward to the final circle. All white symbols are carried forward; however, circles change to squares and vice versa.

meritnotes.com