

Logical Based Venn Diagrams Questions and Answers for Bank Exams Pdf

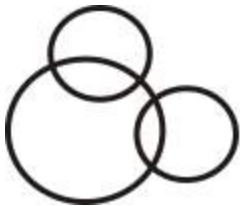
Each of these questions below contains three groups of things. You are to choose from the following five numbered diagrams, the diagram that depicts the correct relationship among the three groups of things in each question.

Brinjal, Meat, Vegetables

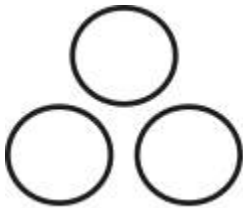
(A) .




(B) .



(C) .



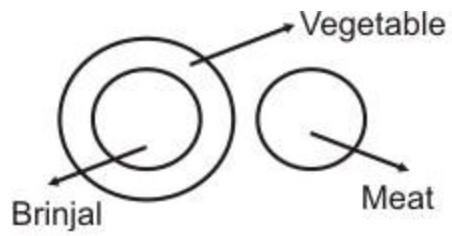
(D) .



[View Answer](#)

Ans: D

Brinjal is a vegetable. But Meat is entirely different.



Question: 2

Which one of the following Venn diagrams correctly illustrates the relationship among the classes :

Carrot, Food, Vegetable?

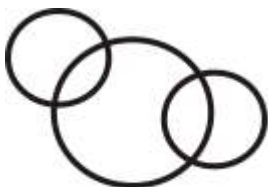
(A) .



(B) .



(C) .



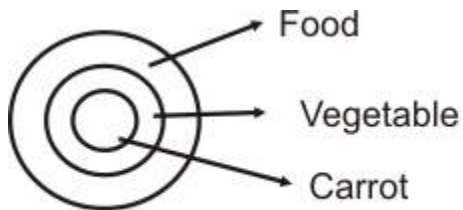
(D) .



[View Answer](#)

Ans: A

All carrots are vegetables. All vegetables are foods.

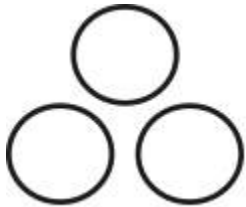


Question: 3

Each one of the following questions contains three items. Using the relationship between these items, match each question with the most suitable diagram.

Plums, Tomatoes, Fruits

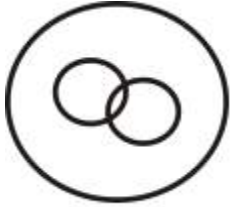
(A) .



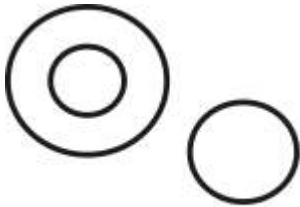
(B) .



(C) .



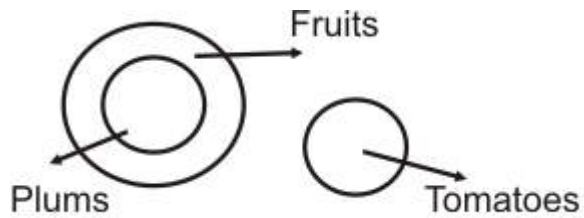
(D) .



[View Answer](#)

Ans: D

All plums are fruits. But, tomatoes are entirely different.

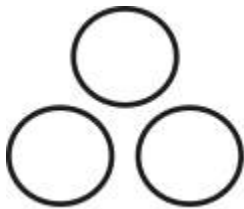


[Question: 4](#)

Each one of the following questions contains three items. Using the relationship between these items, match each question with the most suitable diagram.

Rohtak, Haryana, Punjab

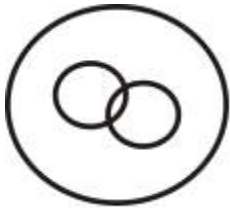
(A)



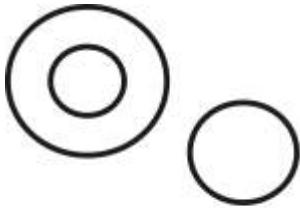
(B) .



(C) .



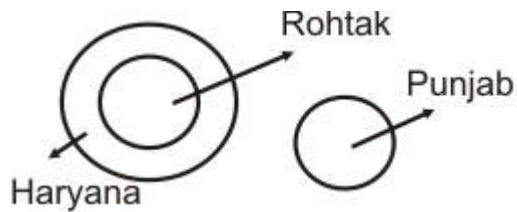
(D) .



[View Answer](#)

Ans: D

Rohtak is a part of Haryana. Punjab is a separate state.



Question: 5


In each of the following questions, choose the Venn diagram which best illustrates the relationship among three given items?

Diseases, Leprosy, Scurvy

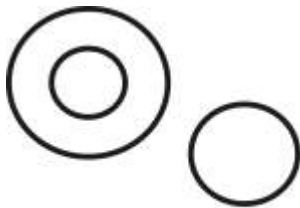
(A) .



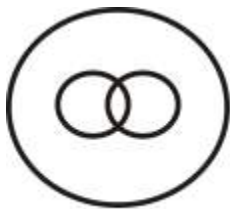
(B).



(C).



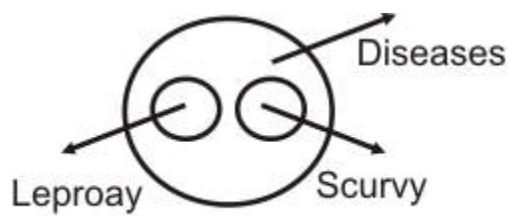
(D).



[View Answer](#)

Ans: A

Both Leprosy and Scurvy are Diseases. But, both are entirely different from each other.



meritnotes.com