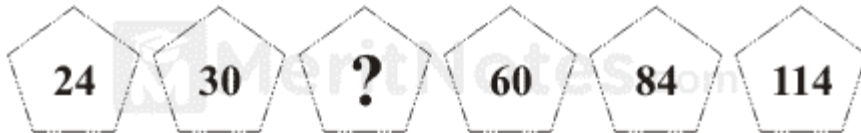


## Mathematics Puzzles Questions with Answer Pdf

Questions : 1

**What number should replace the question mark?**




Ans: 42

The sequence progresses +6, +12, +18, +24, 30.

Questions : 2

**What number should logically replace the question mark?**



Ans: 15

In each row and column, the third number is the product of the first two numbers divided by four.

Questions : 3

**What number should logically replace the question mark?**

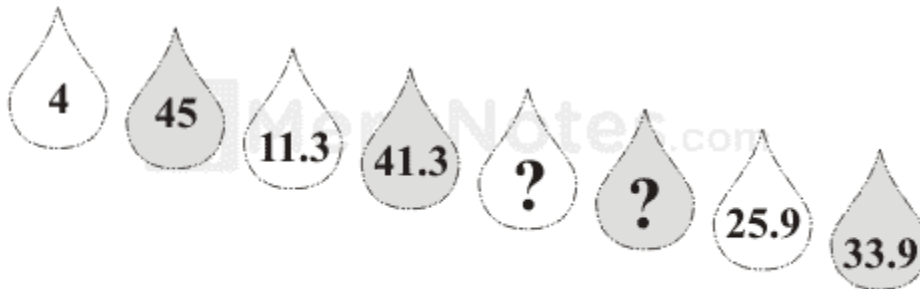


Ans: 8

Each square block of four numbers total 20.

Questions : 4

**Which two numbers should replace the question marks?**




Ans: 18.6, 37.6

There are two interwoven sequences: starting at 45 alternate numbers are -3.7. starting at 4 alternate numbers are +7.3.

Questions : 5

Start at a corner and spiral in to the center  
to find the number to replace the question mark?



Ans: 85

+4 - 7 repeat; start at 111

meritnotes.com