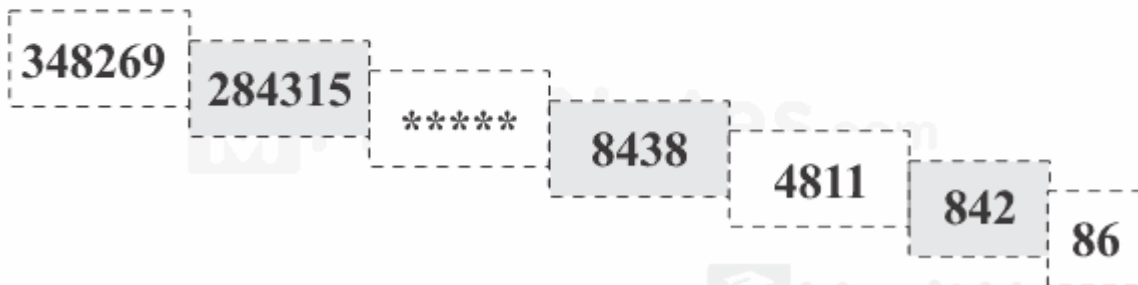


Number Puzzles Practice Test Questions with Answers Pdf

Questions : 1

What numbers is logically missing from the sequence below?

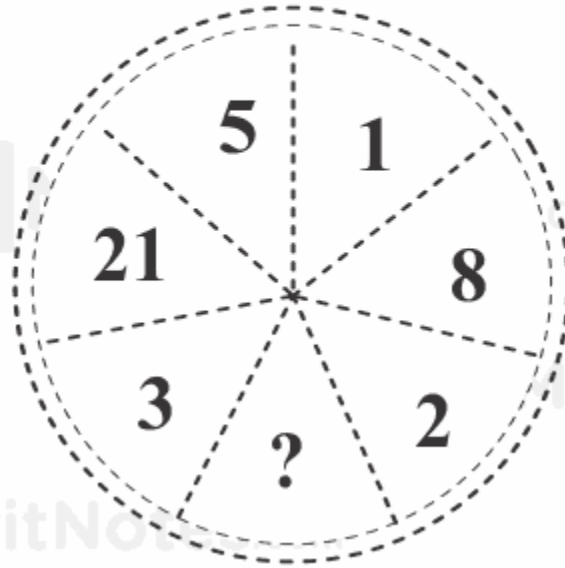


Ans: 34826

Each number is the sum of the last two digits of the previous number, preceded by the remaining numbers in reverse.

Questions : 2

What number should logically replace the question mark?




Ans: 13

Starting at 1 and moving two segments clockwise yields the series 1, 2, 3, 5, 7, ? 21.

Questions : 3

What number should logically replace the question mark?

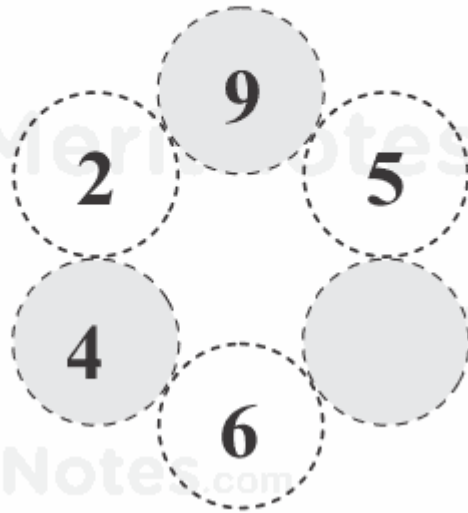


Ans: 726

Each number is produced by adding the previous number to its reverse.

Questions : 4

Complete the wheel by adding the missing number?



Ans: 1

Numbers in the segments on the right hand half of the circle equal double the value of the numbers in the opposite segments, minus 3.

meritnotes.com