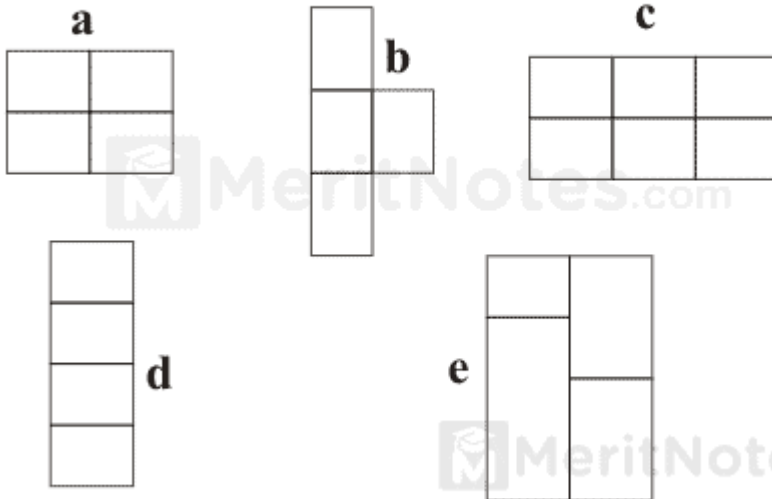


Picture Puzzles Questions with Answers Pdf

Questions : 1

**Which is the odd one out?**

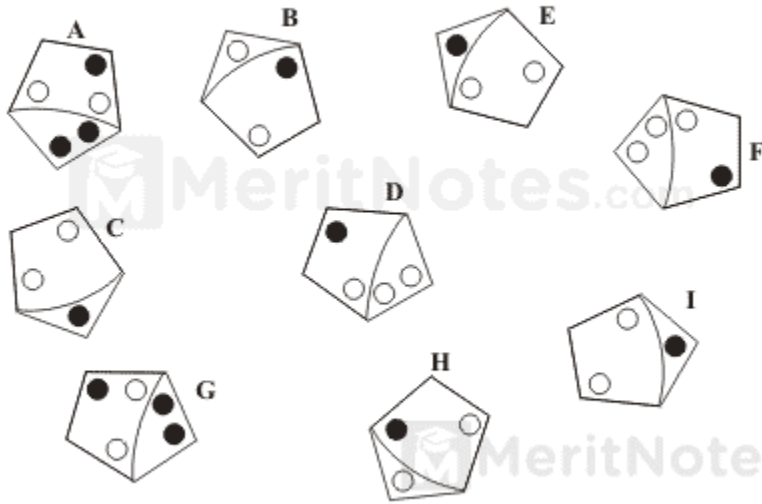


Ans: A

It is made up of six lines whereas the remainder are made up of seven lines.

Questions : 2

**Which is the odd one out?**

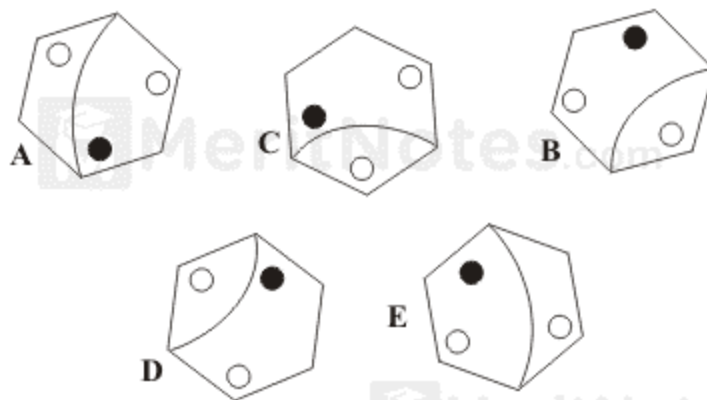


Ans: C

A and G are the same; as are D and F, B and H, and I and E.

Questions : 3

**Which of A, B, C, D or E is the odd one out?**

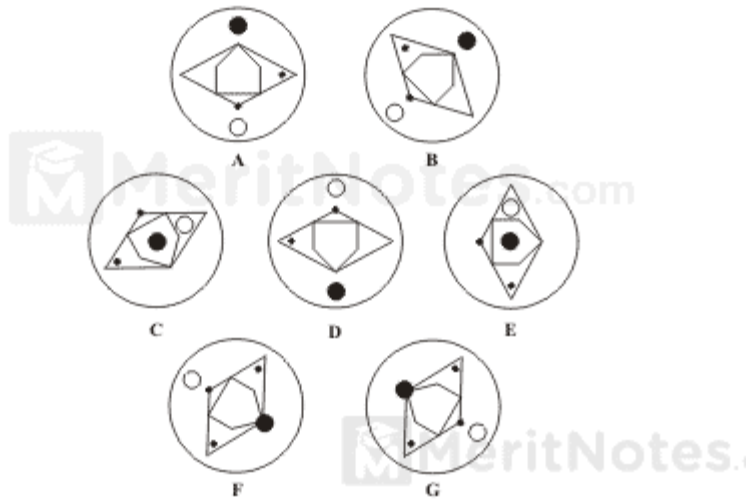


Ans: B

A is the same as E rotated, and C is the same as D.

Questions : 4

**Which of these is the odd one out?**



Ans: B

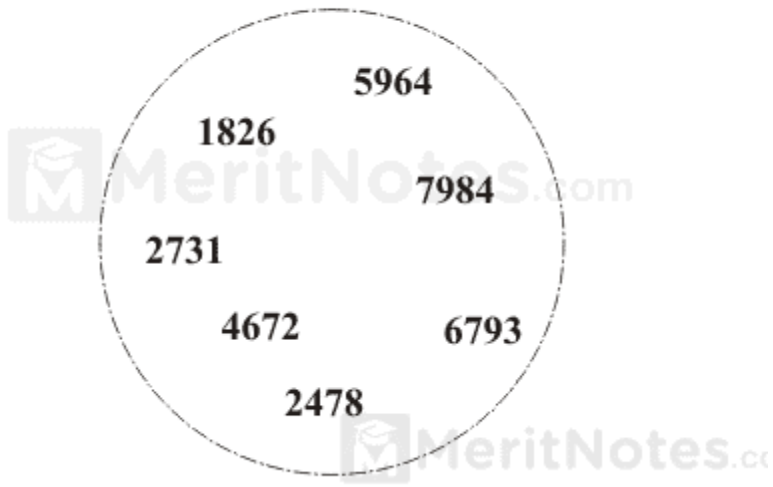
A same as D

F same as G

E same as C

Questions : 5

**Which number is the odd one out?**



Ans: 7984

In all the others multiply the middle two digits to obtain the first and fourth digits, for example 5964, where  $9 \times 6 = 54$ .

meritnotes.com