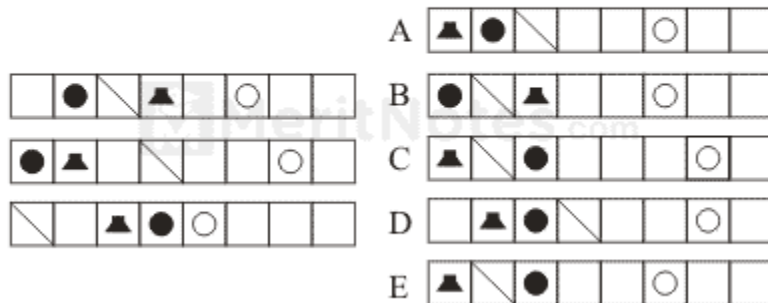


Puzzles Aptitude Questions and Answers Pdf

Questions : 1

Which option below continues the above sequence?



Ans: E

The black circle moves one left, three right

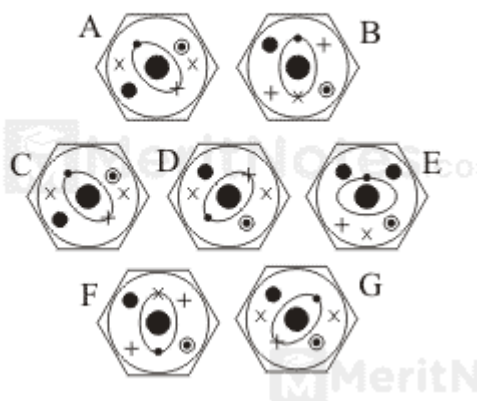
The line moves one right, three left

The tower moves two left, one right

The white circle moves one right, two left

Questions : 2

Which of these is the odd one out?



Ans: E

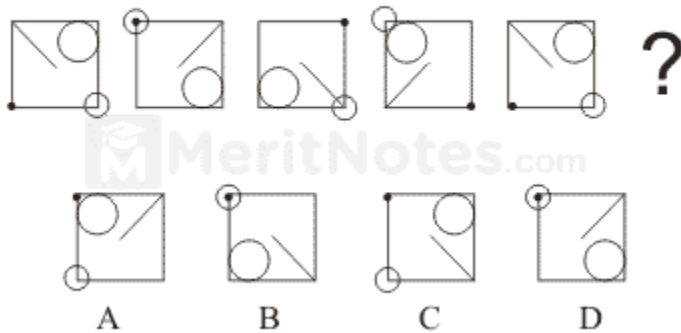
C is the same as A.

D is the same as G.

B is the same as F.

Questions : 3

What comes next?

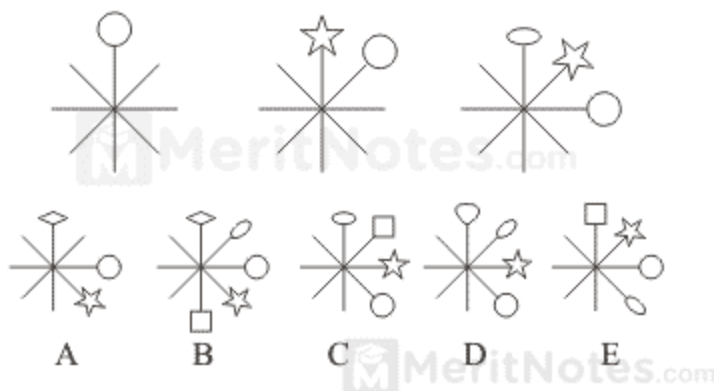


Ans: D

The large circle moves 90° clockwise, the small circle 180°, the black dot 90° clockwise and the line 90° clockwise.

Questions : 4

What comes next?

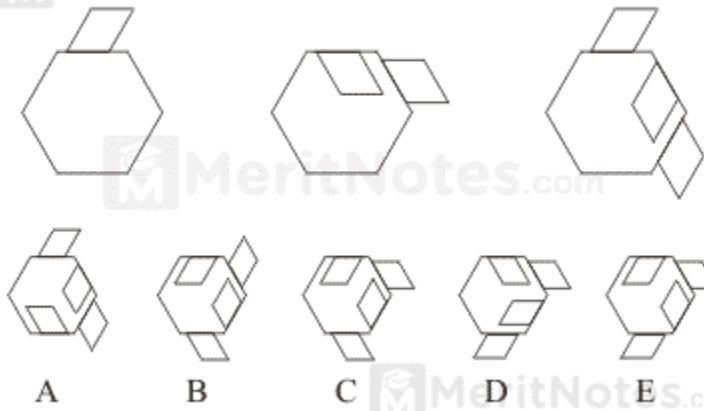


Ans: D

The previous figures moves down at each stage and a new symbol is added at the top.

Questions : 5

What comes next?



Ans: D

A new parallelogram is added at each stage, the previous parallelograms flipping outside then inside the hexagon.

meritnotes.com