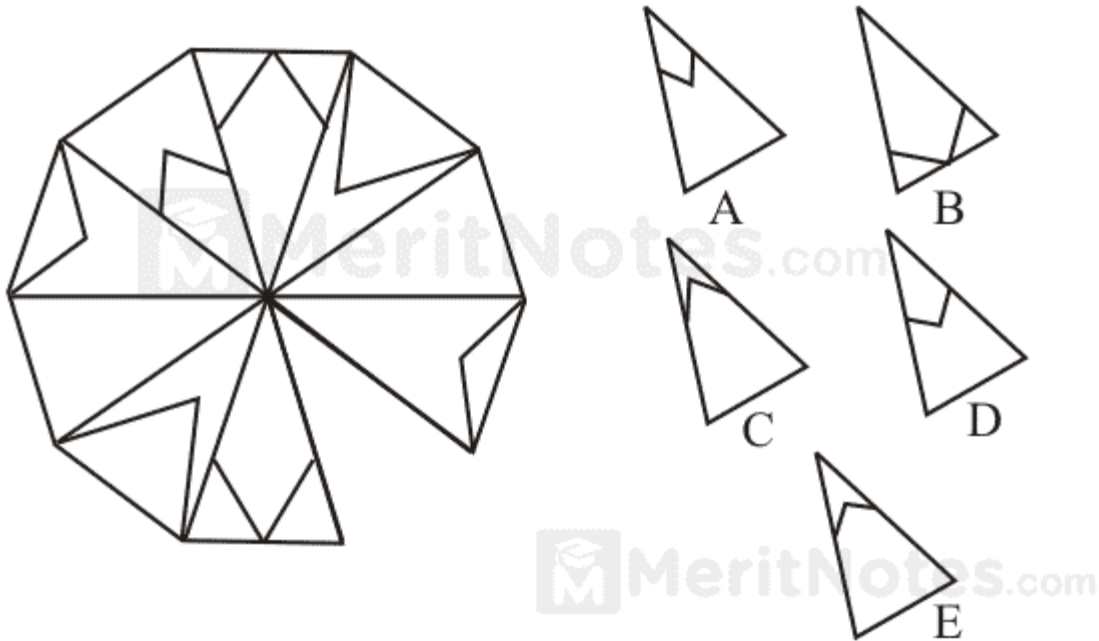


Sequence Puzzles Questions with Answers Pdf

Questions : 1

Find the missing section from the options below.



View Answer

Ans: D

Opposite segments are a mirror image of each other.

Questions : 2

Which hexagon replaces the question mark?



A



B



C



D

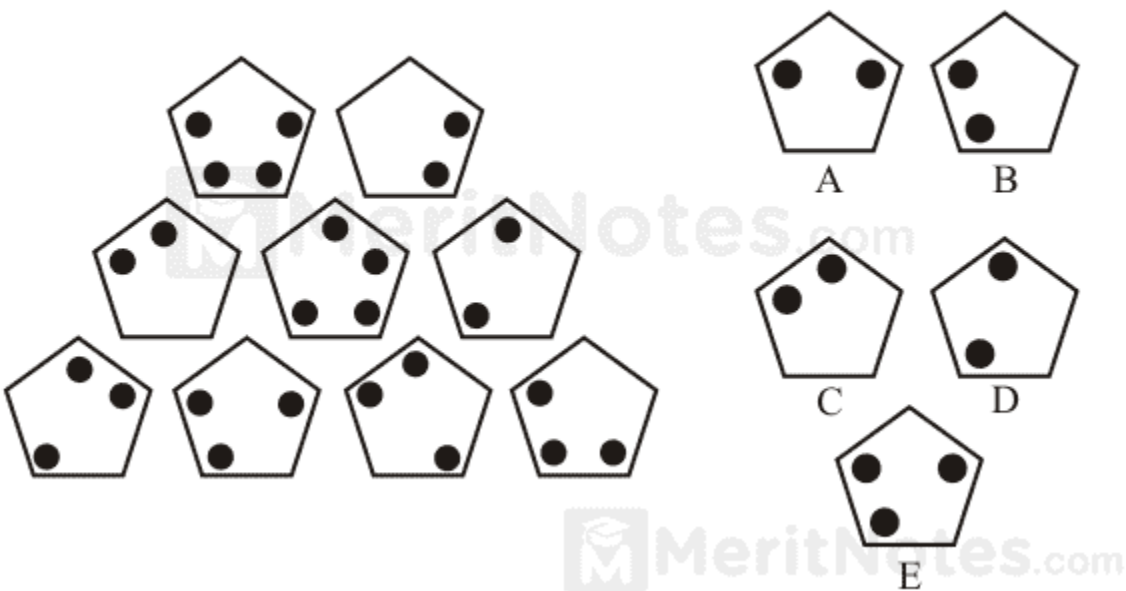
[View Answer](#)

Ans: C

Swirl moves 120° clockwise; black dot moves corner to corner of the pentagon clockwise; pentagon moves 60° clockwise.

Questions : 3

Which pentagon should replace the question mark?



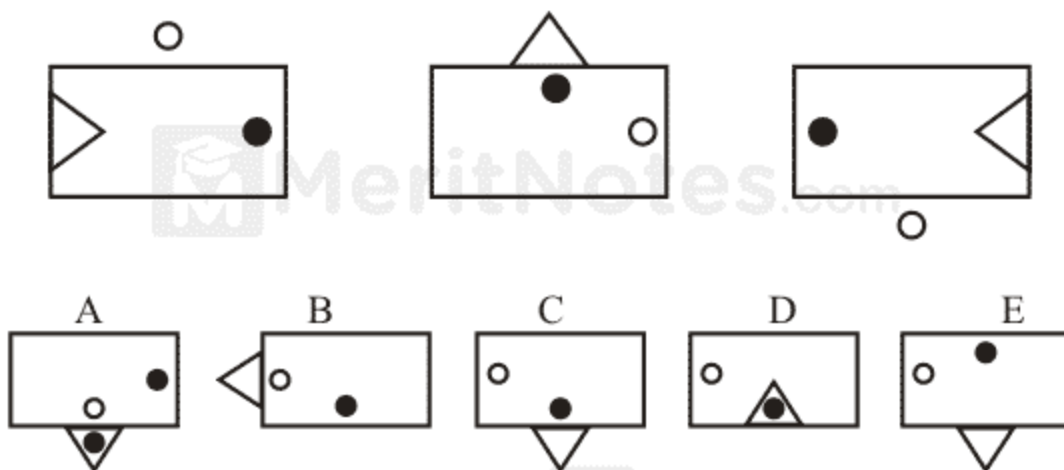
[View Answer](#)

Ans: B

Each pentagon is made by superimposing the two pentagons below it and removing overlapping parts.

Questions : 4

What continues the above sequence?





[View Answer](#)

Ans: C

The triangle moves clockwise one side at each stage and alternates between the inside and the outside of the rectangle. The white dot behaves in the same way as the triangle. The black dot moves counterclockwise one side inside the rectangle.

Questions : 5

What comes next?



A

B

C

D

E

[View Answer](#)

Ans: A

The circles move round one place clockwise at each stage; however, the dot previously at the top left hand corner always changes black to white or vice versa at the next stage.

meritnotes.com